

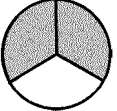
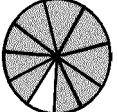
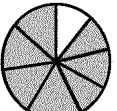
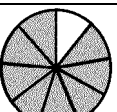
Time: 10 Minutes

Paper Math 2

Total Marks: 10

3rd Month, 3rd Week, 3rd Day Syllabus: Page # 97

Q.1. Match the shape with the given fraction. (10) دی ہوئی فرکشن کو اشکال سے ملائیں۔

	•	•	$\frac{9}{10}$
	•	•	$\frac{8}{9}$
	•	•	$\frac{7}{8}$
	•	•	$\frac{2}{3}$

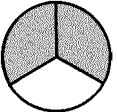
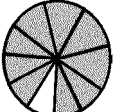
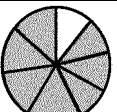
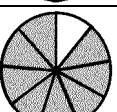
Time: 10 Minutes

Paper Math 2

Total Marks: 10

3rd Month, 3rd Week, 3rd Day Syllabus: Page # 97

Q.1. Match the shape with the given fraction. (10) دی ہوئی فرکشن کو اشکال سے ملائیں۔

	•	•	$\frac{9}{10}$
	•	•	$\frac{8}{9}$
	•	•	$\frac{7}{8}$
	•	•	$\frac{2}{3}$

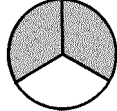
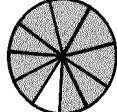
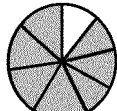
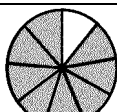
Time: 10 Minutes

Paper Math 2

Total Marks: 10

3rd Month, 3rd Week, 3rd Day Syllabus: Page # 97

Q.1. Match the shape with the given fraction. (10) دی ہوئی فرکشن کو اشکال سے ملائیں۔

	•	•	$\frac{9}{10}$
	•	•	$\frac{8}{9}$
	•	•	$\frac{7}{8}$
	•	•	$\frac{2}{3}$

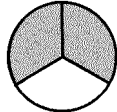
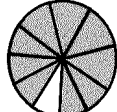
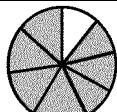
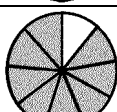
Time: 10 Minutes

Paper Math 2

Total Marks: 10

3rd Month, 3rd Week, 3rd Day Syllabus: Page # 97

Q.1. Match the shape with the given fraction. (10) دی ہوئی فرکشن کو اشکال سے ملائیں۔

	•	•	$\frac{9}{10}$
	•	•	$\frac{8}{9}$
	•	•	$\frac{7}{8}$
	•	•	$\frac{2}{3}$